






TEST PREPARATION




1. Answer:

Living things can: _____




2. Choose according to the picture.

	a. Herbivores b. Carnivores c. Omnivores	a. Wild b. Domestic	a. Oviparoes b. Viviparoes c. Ovoviviparoes
	a. Herbivores b. Carnivores c. Omnivores	a. Wild b. Domestic	a. Oviparoes b. Viviparoes c. Ovoviviparoes
	a. Herbivores b. Carnivores c. Omnivores	a. Wild b. Domestic	a. Oviparoes b. Viviparoes c. Ovoviviparoes
	a. Herbivores b. Carnivores c. Omnivores	a. Wild b. Domestic	a. Oviparoes b. Viviparoes c. Ovoviviparoes
	a. Herbivores b. Carnivores c. Omnivores	a. Wild b. Domestic	a. Oviparoes b. Viviparoes c. Ovoviviparoes

3. Write the body part's of the animal



4. Classify:



VERTEBRATES	INVERTEBRATES

TEST PREPARATION



5. Write solid, liquid or gas.

1.



Pencil

2.



Hot air

3.



Milk

4.



Oil

5.



Cake

6.



Carbon dioxide

7.



Glasses

8.



Oxygen

9.



Shampoo

10.



Water vapor

11.



Syrup

12.



Rock

6. How it is useful to humans?

